



1:1

out of 20

- 1 $7 + 8$ 6 $13 - 4$
 2 $12 - 9$ 7 3×3
 3 4×2 8 9 plus 5.
 4 $8 + 6$ 9 4 groups of 5.
 5 18 10 15
 + 11 - 4

- 11 34, 6, 9, 12, 13
 a Which of these are odd?
 b Which of these are even?.....
 12 Write the numeral for *nine hundred and forty-two*.
 13 Write 65c in decimal form.
 14 
 Estimate then measure the length of this bar in centimetres.
 Estimate = cm Measure = cm




- Write the total value of these coins in decimal form.
 16 $7 \times 4 =$
 17 Does a spoon weigh more than 1 kilogram?
 18 The next odd number after 31.
 19 How many sides has a quadrilateral?
 20 a Subtract 5 from 9.
 b The product of 5 and 9.

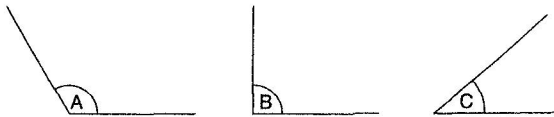
1:2

out of 15

- 1 $12 + 7$ 6 9×2
 2 $16 + 4$ 7 7×4
 3 $10 - 7$ 8 17 subtract 7.
 4 $11 - 6$ 9 20 minus 12.
 5 15 10 15
 + 2 - 8




- 11 a The next two square numbers after 30.
 b  Shade one third of the snakes.

- 12 
 a. Write the angles in order of size with the smallest first.
 b. Which angle is a right angle?



Animals Seen	
koala IIII	emu IIII IIII
bilby IIII I	echidna IIII III



- 13 How many bilbies were seen?
 14 Which animal was seen most often?
 15 How many more echidnas than koalas were seen?



+ ibles

odd + odd =

